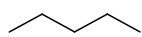


NOMENKLATURA ALKANÓW I CYKLOALKANÓW

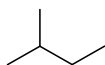
dr inż. Jan Alfuth

Zad.1. Podaj nazwy poniższych związków zgodnie z regułami IUPAC. Jeżeli to możliwe, zapisz również nazwę zwyczajową.

a)



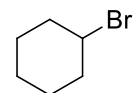
b)



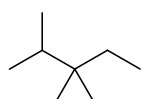
c)



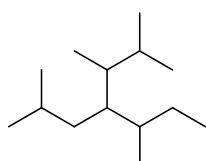
d)



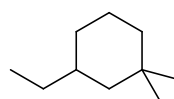
e)



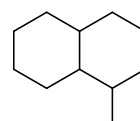
f)



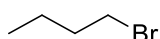
g)



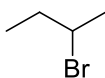
h)



i)



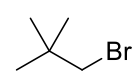
j)



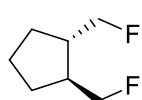
k)



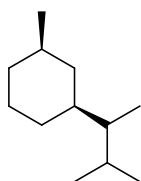
l)



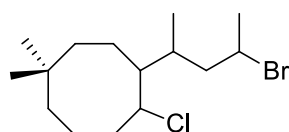
m)



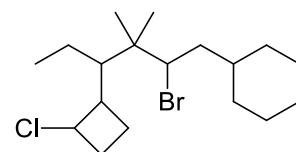
n)



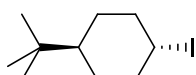
o)



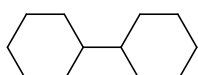
p)



r)



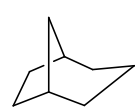
s)



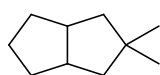
t)



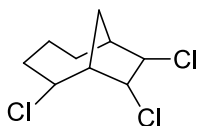
u)



v)



w)



x)



y)

